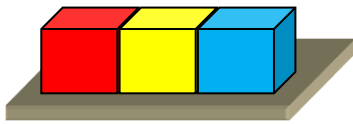


Motorized Shake Table

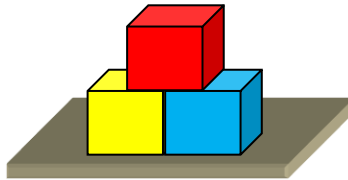
Initials/number: _____

Teacher: _____

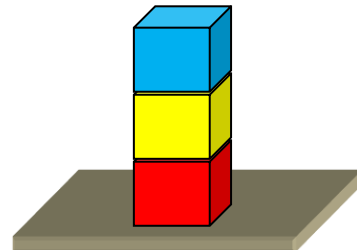
Date: _____



(a)



(b)



(c)

1. During an earthquake, which of the structures above is more likely to fall? Circle that structure.

2. Explain your answers to question 1 above.

3. List things in the classroom or home which might become hazards during an earthquake.
