

Car on A Roll

Name: _____

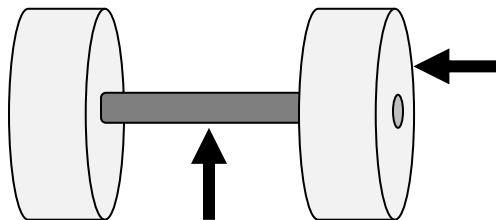
Teacher: _____

Date: _____

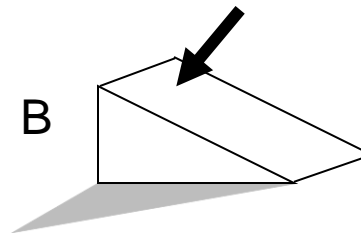
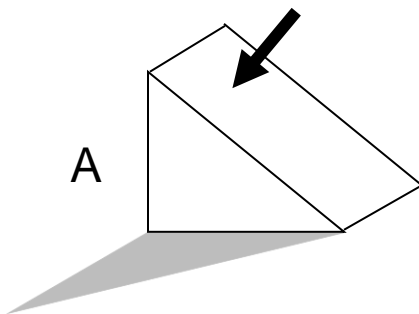
Please circle ALL THE WORDS that describe the activity you just did:

Fun	Asking Questions	Boring
Creative	Like	Solving Problems
Dislike	Hard	I'm good at it
Easy	Thinking	Learning

- 1) In the drawing below, circle the arrow that points to the AXLE.



- 2) A car starts at the top of each ramp. Which ramp will make the cart go the farthest distance before it stops? Circle the ramp.



(Turn over)

- 3) Which force makes a car roll down the ramp?
- A. Magnetism
 - B. Gravity
 - C. Friction
 - D. Lift